

LESSON 22: Scaled Picture Graphs

Homework

.....

Name _____ **Date** _____

Favorite Juice Flavor	Apple	Orange	Tomato	Grapefruit	Cranberry
Number of Students	14	12	4	5	10

Directions: Using the information above, create a picture scaled graph.

Favorite Juice Flavors

1.	Apple	
2.	Orange	
3.	Tomato	
4.	Grapefruit	
5.	Cranberry	

Each  represents 2 students.





LESSON 22: Scaled Picture Graphs


Homework

Name _____ Date _____

Directions: Use the chart below to answer Questions 6 - 10.

Favorite Type of Storm

	Number of Students
Rain Only	
Thunder and Lightning	
Snow Storm	
None of the Above	

Each  represents 4 students.

6. How many students are represented by each lightning bolt? ____
7. How many students chose snow storm as their favorite? ____
8. How many more students chose snow storm over thunder and lightning?

9. How many more students chose thunder and lightning over rain only and none of the above combined? ____
10. How many students enjoyed rain or snow as their storm of choice?
