

## LESSON 26: Area of Squares and Rectangles

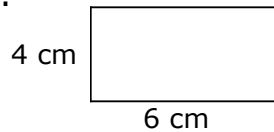
## Homework

Name \_\_\_\_\_

Date \_\_\_\_\_

**Directions:** Find the area for the following squares and rectangles.

1.



Area: \_\_\_\_\_

3. Rectangle – Length: 9 in.  
Width: 2 in.

Area: \_\_\_\_\_

5. Rectangle – Length: 9 m  
Width: 4 m

Area: \_\_\_\_\_

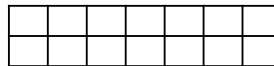
7. Rectangle:  
Length: 7 cm  
Width: 6 cm

Area: \_\_\_\_\_

9. Square:  
Side: 7 m

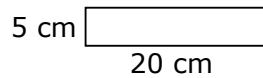
Area: \_\_\_\_\_

2.



Area: \_\_\_\_\_

4.



Area: \_\_\_\_\_

6.



Area: \_\_\_\_\_

8. Square:  
Side: 9 cm

Area: \_\_\_\_\_

10. Rectangle:  
Length: 10 in.  
Width: 9 in.

Area: \_\_\_\_\_