

LESSON 28: Area of Complex Figures


Homework

.....

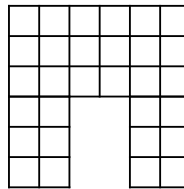
Name _____ **Date** _____

Directions: Find the area of the following complex figures.

1.



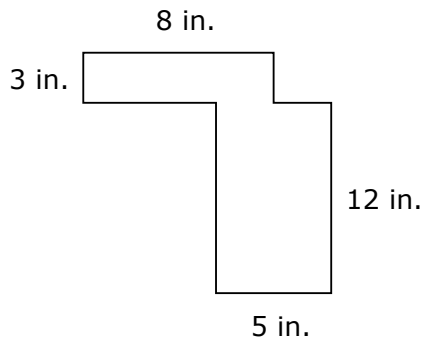
2.



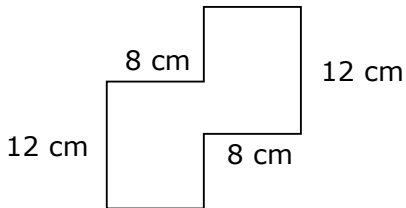
3.



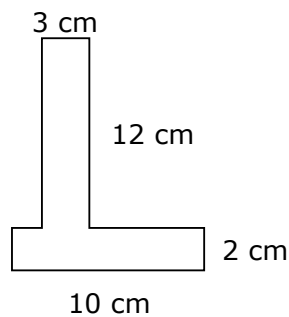
4.



5.



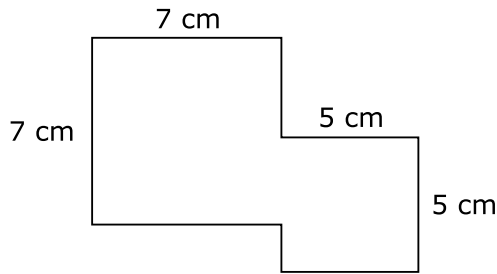
6.



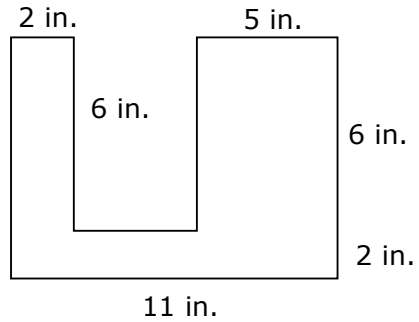
LESSON 28: Area of Complex Figures

Homework

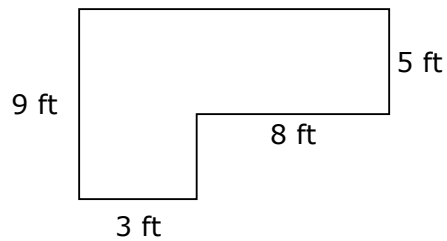
7.



8.



9. The complex figure below shows the kitchen counters in the Millers' home. How many square feet of granite will be needed to cover the counters?



10. The complex figure below shows the layout of a playground. If the playground needs to be covered with straw, how many square feet will be covered?

