

LESSON 29: Quadrilateral Attributes

Homework

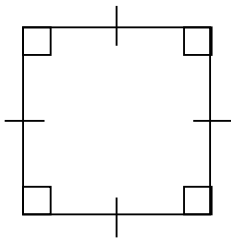
Name _____ Date _____

Directions: Complete Problems 1 - 10.

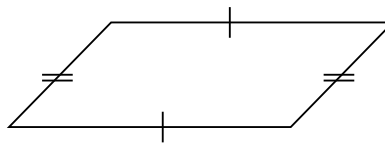
- 1. Draw a rectangle.
- 2. Draw a rhombus.

- 3. Draw a quadrilateral that is not a special type of quadrilateral.
- 4. Draw a trapezoid.

5. What terms could be used to name the quadrilateral drawn below? (There are 4.)



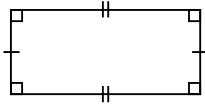
6. What term could be used to name the quadrilateral drawn below?



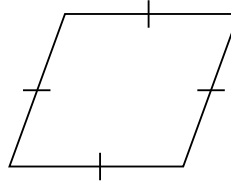
LESSON 29: Quadrilateral Attributes

Homework

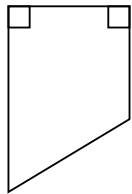
7. What terms could be used to name the quadrilateral drawn below? (There are 2.)



8. What is the best name for the quadrilateral below?



9. What is the best name for the quadrilateral below?



10. What is the best name for the quadrilateral below?

