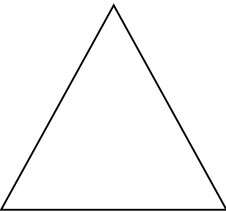

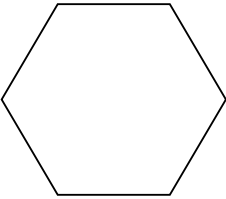
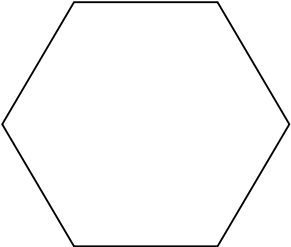


LESSON 30: Shapes With Equal Areas

**Homework**

.....  
**Name** \_\_\_\_\_ **Date** \_\_\_\_\_

**Directions:** Complete the chart by dividing the shape, naming the smaller shape, and giving the area of the smaller shape.

Shape	Number of equal parts to split into	Name of the smaller shape	Area
	Four	_____	The smaller shape is __ the area of the larger shape.
	Six	_____	The smaller shape is __ the area of the larger shape.
	Two	_____	The smaller shape is __ the area of the larger shape.
	Six	_____	The smaller shape is __ the area of the larger shape.