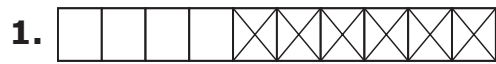


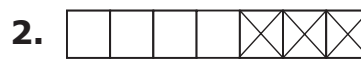
Appendix B: Fact Masters - Subtraction

Homework

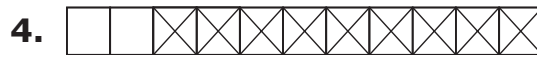
.....
Name _____ **Date** _____

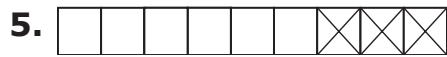
Directions: Write a subtraction fact for each of the following pictures.

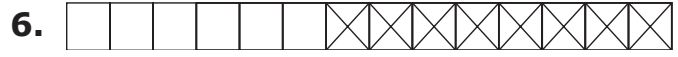












Directions: Draw pictures to show the following subtraction facts.

7. $10 - 10$

8. $12 - 6$

9. $7 - 1$

10. $13 - 12$