

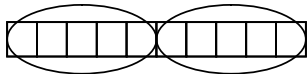
Appendix B: Fact Masters - Division

Homework

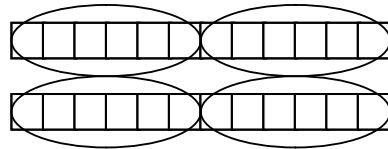
.....
Name _____ **Date** _____

Directions: Write a division fact for each of the following pictures.

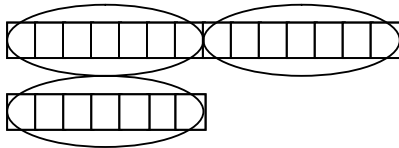
1.



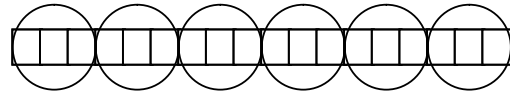
2.



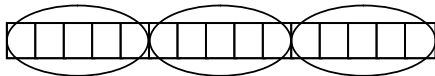
3.



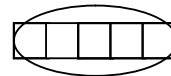
4.



5.



6.



Directions: Draw pictures to show the following division facts.

7. $25 \div 5$

8. $9 \div 3$

9. $16 \div 4$

10. $42 \div 7$