

LESSON 27: Angle Discovery

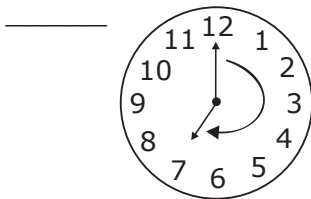
Homework

.....

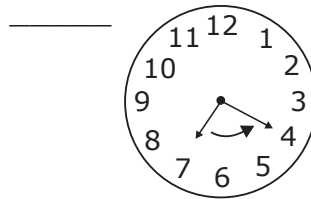
Name _____ Date _____

Directions: Without using a protractor, tell how many degrees are in the angle made by the hands of the clock in Questions 1 and 2.

1.

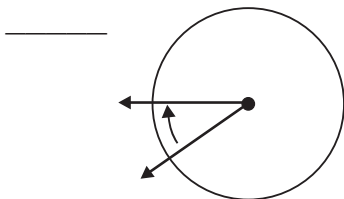


2.

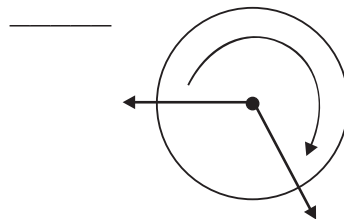


Directions: Estimate how many degrees are in the angle inside the circle for Questions 3 and 4.

3.



4.



Directions: For Questions 5 and 6, tell how many degrees the described angle has.

5. An angle goes through 178 one-degree angles.

6. An angle goes through 42 one-degree angles.

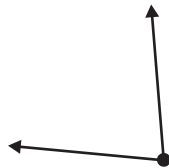
LESSON 27: Angle Discovery

Homework

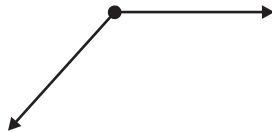
Name _____ Date _____

Directions: Use your protractor to measure the number of degrees in the angles for Questions 7 – 10.

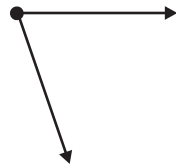
7. _____



8. _____



9. _____



10. _____

