

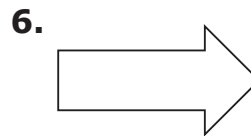
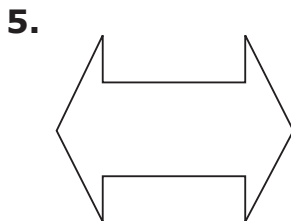
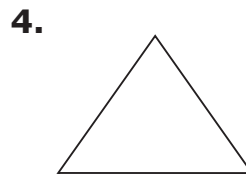


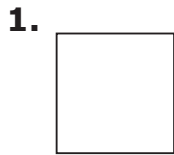
LESSON 30: Line Symmetry

Homework

Name _____

Date _____

Directions: Draw all the lines of symmetry for the following figures.



Draw figures with the following number of lines of symmetry. Do not use the same ones you created on S298.

7. 2 lines of symmetry

8. 4 lines of symmetry

9. No lines of symmetry

10. More than 4 lines of symmetry