

Appendix A: Fact Masters – Multiplication

**Homework**

.....  
**Name** \_\_\_\_\_ **Date** \_\_\_\_\_

**Directions:** Draw arrays to show the following multiplication facts.

1.  $2 \bullet 4$

2.  $6 \bullet 3$

3.  $5 \bullet 4$


4.  $1 \bullet 9$

5.  $3 \bullet 4$

6.  $4 \bullet 3$


**Directions:** Write a multiplication fact for each of the following arrays.

7.




\_\_\_\_\_

8.




\_\_\_\_\_

9.



\_\_\_\_\_

10.



\_\_\_\_\_