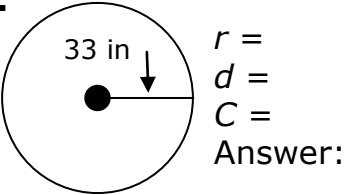


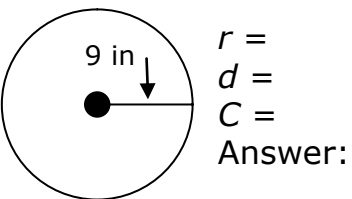
LESSON 25: Circumference of a Circle

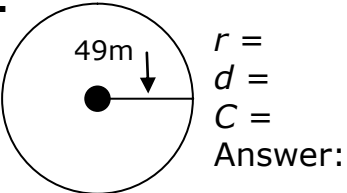
Homework

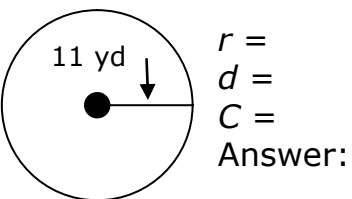
Name \_\_\_\_\_ Date \_\_\_\_\_

**Directions:** Solve the following problems for radius, diameter, or circumference ( $C = \pi d$ ). Use 3.14 for the value of  $\pi$ .

1. 

2. 

3. 

4. 

Complete the chart.

	Radius	Diameter	Circumference Problem $C = \pi d$	Answer
5.	35 cm			
6.		48 m		
7.		54 in		
8.	7 in			