

LESSON 26: Area of a Circle

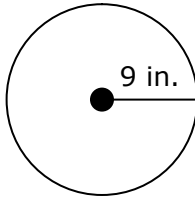
Homework

Name _____ Date _____

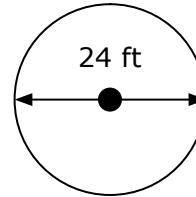
Directions: Find the area of each circle to the nearest hundredth.

1. Find the area of a circle with a radius of 6 feet. 2. Find the area of a circle with a diameter of 15 yd.

3.



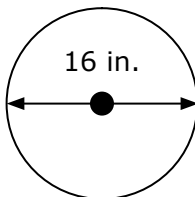
4.



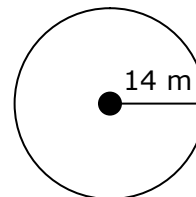
5. Find the area of a circle with a radius of 4 yards.

6. Find the area of a circle with a diameter of 18 mm.

7.



8.



9. Find the area of a circle with a radius of 2 meters.

10. Find the area of a circle with a diameter of 3 feet.